



Name:

How many ?

Count the fantails and worms and then fill in the missing numbers and words.





How many fantail birds are there? How many worms are there?

There are more fantail birds than worms.

If the fantail birds eat half the worms, how many worms would be left?

ABCDEFGHIJKLMNOPQRSTUVWXYZ



How many Ruru are there? How many Ruru chicks are hatching?

There are more Ruru chicks.

If each Ruru had one chick, how many chicks would there be in total?